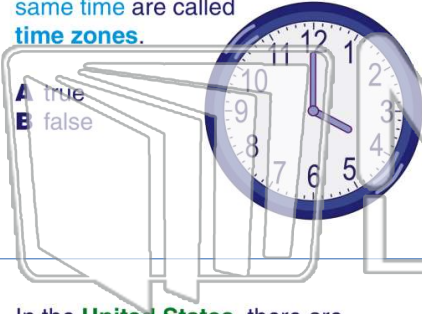




Name _____ Class _____ Date _____

1 Regions of the earth that observe the same time are called **time zones**.

- A true
- B false




2 There are _____ **time zones** in the world.

- A 2
- B 12
- C 24
- D 48



3 In the **United States**, there are _____ **time zones**.

4 Each time zone is _____ **apart** from the time zone next to it.



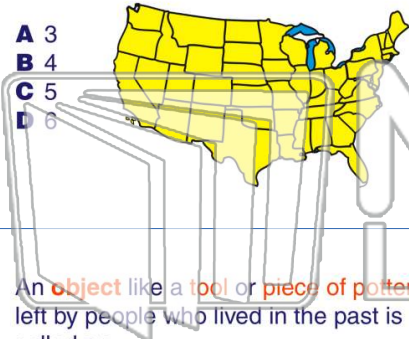
5

PREVIEW

Please [Sign In](#) or [Sign Up](#) to download the printable version of this worksheet

7

- A 3
- B 4
- C 5
- D 6



_____ is called _____.

- A the Prime Meridian
- B Daylight Savings Time
- C the Tropic of Cancer
- D the Tropic of Capricorn



9 An **object** like a **tool** or **piece of pottery** left by people who lived in the past is called an _____.

- A artist
- B artifact
- C artery
- D argument



10 An **arrowhead** is an example of an **artifact**.

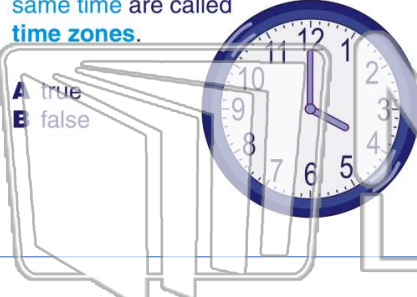
- A true
- B false





Name _____ Class _____ Date _____

1 Regions of the earth that observe the same time are called **time zones**.



- A true
- B false

2 There are _____ **time zones** in the world.



- A 2
- B 12
- C 24
- D 48

3 In the **United States**, there are _____ **time zones**.



4 Each time zone is _____ **apart** from the time zone next to it.

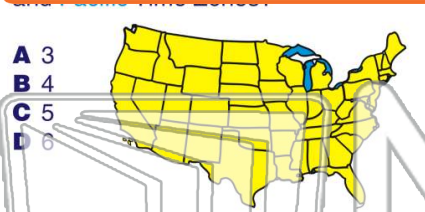
PREVIEW

Please [Sign In](#) or [Sign Up](#) to download the printable version of this worksheet

5



7



- A 3
- B 4
- C 5
- D 6

_____ is called _____.

- A the Prime Meridian
- B Daylight Savings Time
- C the Tropic of Cancer
- D the Tropic of Capricorn



9 An **object** like a **tool** or **piece of pottery** left by people who lived in the past is called an _____.

- A artist
- B artifact
- C artery
- D argument



10 An **arrowhead** is an example of an **artifact**.

- A true
- B false

