




Name _____ Class _____ Date _____

1 The **four states** in the **Southwestern Region** are **Oklahoma, Arizona, New Mexico, and** _____.

- A Pennsylvania
- B Texas
- C North Dakota
- D Hawaii



2 The **gulf** to the **southeast** of the **Southwestern Region** is the _____.

- A Gulf of New Hampshire
- B Gulf of Canada
- C Gulf of Mexico
- D Gulf of St. Lawrence



3 The **country** **south** of the **Southwestern Region** is _____.

4 The **river** that forms the **border** between **Mexico** and **part of the Southwestern Region** is the _____.

5

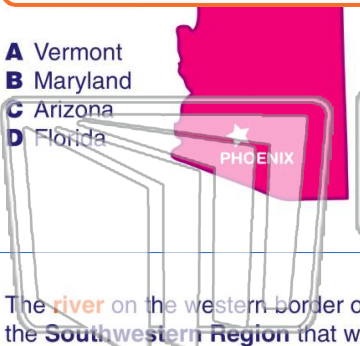


PREVIEW

Please [Sign In](#) or [Sign Up](#) to download the printable version of this worksheet

7

- A Vermont
- B Maryland
- C Arizona
- D Florida



- A Albuquerque
- B Concord
- C Syracuse
- D Denver



9 The **river** on the **western border** of the **Southwestern Region** that was responsible for carving the **Grand Canyon** is the _____.

- A Mississippi River
- B Colorado River
- C Red River
- D Wabash River



10 A **landform** found in the **Southwestern Region** that is shaped like a **steep hill with a flat top** is called a _____.

- A valley
- B canyon
- C peninsula
- D mesa






Name _____ Class _____ Date _____

1 The **four states** in the **Southwestern Region** are **Oklahoma, Arizona, New Mexico, and _____**.

- A Pennsylvania
- B Texas
- C North Dakota
- D Hawaii



2 The **gulf** to the **southeast** of the **Southwestern Region** is the _____.

- A Gulf of New Hampshire
- B Gulf of Canada
- C Gulf of Mexico
- D Gulf of St. Lawrence



3 The **country south** of the **Southwestern Region** is _____.

4 The **river** that forms the **border** between **Mexico** and **part of the Southwestern Region** is the _____.

5

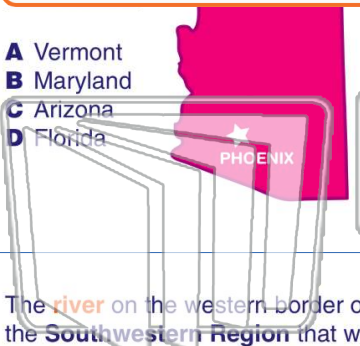


PREVIEW

Please [Sign In](#) or [Sign Up](#) to download the printable version of this worksheet

7

- A Vermont
- B Maryland
- C Arizona
- D Florida



- A Albuquerque
- B Concord
- C Syracuse
- D Denver



9 The **river** on the **western border** of the **Southwestern Region** that was responsible for carving the **Grand Canyon** is the _____.

- A Mississippi River
- B Colorado River
- C Red River
- D Wabash River



10 A **landform** found in the **Southwestern Region** that is shaped like a **steep hill with a flat top** is called a _____.

- A valley
- B canyon
- C peninsula
- D mesa

