



Name _____ Class _____ Date _____

1

The **Grand Coulee Dam** on the Columbia River in Washington produces water

power, also called _____

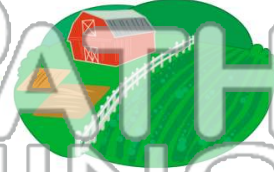
- A oil power
- B natural gas
- C hydroelectricity
- D propane



2

People are able to farm in **dry parts** of the Western Region because a **method of watering**, called _____, is used.

- A vegetation
- B irrigation
- C excavation
- D invitation



3

Valuable minerals like **gold, silver, and _____** are found in the **Western Region**.



4

Yellowstone National Park in Wyoming is known for its erupting hot springs, such as **Old Faithful**. These eruptions are _____

5



PREVIEW

Please [Sign In](#) or [Sign Up](#) to download the printable version of this worksheet

7

- A Denver
- B Dallas
- C Buffalo
- D St. Louis



_____ products is an important part of the economy.


- A copper
- B silver
- C wood
- D gold



9

Important crops in Hawaii are **sugarcane, papaya, and _____**.

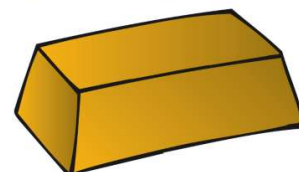
- A apples
- B pineapples
- C strawberries
- D tomatoes



10

Alaska has a **strong economy** based on tourism and its **abundant natural resources** like oil, gold, and natural gas.

- A true
- B false





Name _____ Class _____ Date _____

1

The **Grand Coulee Dam** on the Columbia River in Washington produces water

power, also called _____

- A oil power
- B natural gas
- C hydroelectricity
- D propane



2

People are able to farm in **dry parts** of the Western Region because a **method of watering**, called _____, is used.

- A vegetation
- B irrigation
- C excavation
- D invitation



3

Valuable minerals like **gold, silver, and _____** are found in the **Western Region**.



4

Yellowstone National Park in Wyoming is known for its erupting hot springs, such as **Old Faithful**. These eruptions are _____

5



PREVIEW

Please [Sign In](#) or [Sign Up](#) to download the printable version of this worksheet

7

- A Denver
- B Dallas
- C Buffalo
- D St. Louis



_____ products is an important part of the economy.

- A copper
- B silver
- C wood
- D gold



9

Important crops in Hawaii are **sugarcane, papaya, and _____**.

- A apples
- B pineapples
- C strawberries
- D tomatoes



10

Alaska has a **strong economy** based on tourism and its **abundant natural resources** like oil, gold, and natural gas.

- A true
- B false

