



Name _____ Class _____ Date _____

1 Egypt is located on **which** continent?

- A Europe
- B Australia
- C South America
- D Africa



2 Early Egyptians settled around what **body of water**?

- A Amazon River
- B Red Sea
- C Nile River
- D Atlantic Ocean



3 Before the ancient Greeks **named** Egypt, it was known as _____.

- A Africa
- B Kemet
- C Thebes
- D Nileland



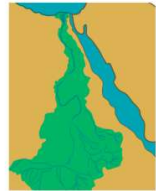
4 The history of Egypt is usually divided into **three parts**, The Old Kingdom, The _____ Kingdom and the New Kingdom.

- A Intermediate
- B Second
- C Middle
- D Fertile



5 The Nile was **not** just a **source of water**, but also created _____.

- A pyramids
- B desert
- C dynasties
- D farmland




6 In order to predict when the Nile would _____, Egyptians **studied the weather**.

- A dry out
- B turn red
- C flood
- D fill with fish




7 A _____ was used in Egypt to **keep track of the weather**.

- A meteorologist
- B calendar
- C thermometer
- D sundial



8 To **save water** for **dry times**, the Egyptians developed a method of _____.

- A silting
- B irrigation
- C refrigeration
- D papyrus




9 When the Egyptians could **not** understand the patterns of weather, they **relied on the gods** for explanation.

- A true
- B false



10 The Egyptians thought that the **sun** was a **god who was born every day and died every night**.

- A true
- B false





Name _____ Class _____ Date _____

1 Egypt is located on **which continent**?

- A Europe
- B Australia
- C South America
- D Africa



(D)

2 Early Egyptians settled around what **body of water**?


- A Amazon River
- B Red Sea
- C Nile River
- D Atlantic Ocean



(C)

3 Before the ancient Greeks **named Egypt**, it was known as _____.

- A Africa
- B Kemet
- C Thebes
- D Nileland



(B)

4 The history of Egypt is usually divided into **three parts**, The Old Kingdom, The _____ Kingdom and the New Kingdom.

- A Intermediate
- B Second
- C Middle
- D Fertile



(C)

5 The Nile was not just a **source of water**, but also created _____.

- A pyramids
- B desert
- C dynasties
- D farmland



(D)

6 In order to predict when the Nile would _____, Egyptians **studied the weather**.

- A dry out
- B turn red
- C flood
- D fill with fish



(C)

7 A _____ was used in Egypt to **keep track of the weather**.


- A meteorologist
- B calendar
- C thermometer
- D sundial



(B)

8 To **save water** for **dry times**, the Egyptians developed a method of _____.

- A silting
- B irrigation
- C refrigeration
- D papyrus



(B)

9 When the Egyptians could not understand the patterns of weather, they **relied on the gods** for explanation.


- A true
- B false



(A)

10 The Egyptians thought that the **sun** was a **god who was born every day and died every night**.

- A true
- B false



(A)