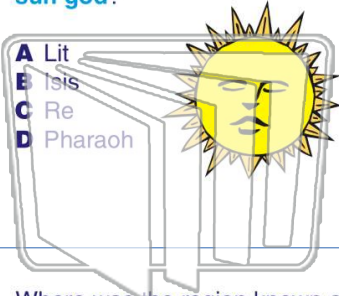




Name \_\_\_\_\_ Class \_\_\_\_\_ Date \_\_\_\_\_

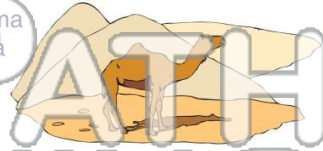
1 What was the name of the sun god?

- A Lit
- B Isis
- C Re
- D Pharaoh



2 What desert borders Egypt to the west?

- A Atacama
- B Sahara
- C Gobi
- D Saudi



# NEW PATH LEARNING

3 Where was the region known as Lower Egypt located?



4 Around 3000 B.C., \_\_\_\_\_ Egypt gained control of the area and united the two regions.



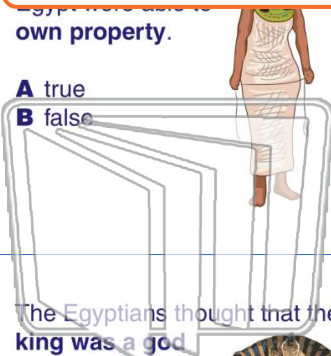
5

**PREVIEW**

Please [Sign In](#) or [Sign Up](#) to download the printable version of this worksheet

7 Egyptians did not own property.

- A true
- B false



8 The Egyptians called their king.

- A pyramid
- B mummy
- C edict
- D pharaoh



# NEW PATH LEARNING

9 The Egyptians thought that their king was a god in human form.

- A true
- B false



10 What system of writing was used by the Egyptians?

- A mastabas
- B hieroglyphics
- C vizier
- D scribes

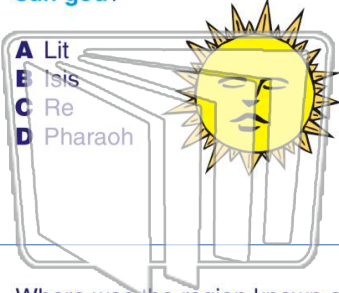




Name \_\_\_\_\_ Class \_\_\_\_\_ Date \_\_\_\_\_

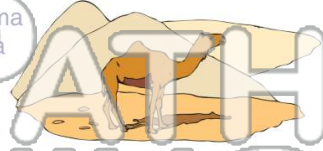
1 What was the name of the sun god?

- A Lit
- B Isis
- C Re
- D Pharaoh



2 What desert borders Egypt to the west?

- A Atacama
- B Sahara
- C Gobi
- D Saudi



NEW PATH LEARNING

3 Where was the region known as Lower Egypt located?



4 Around 3000 B.C., \_\_\_\_\_ Egypt gained control of the area and united the two regions.

B

C

**PREVIEW**

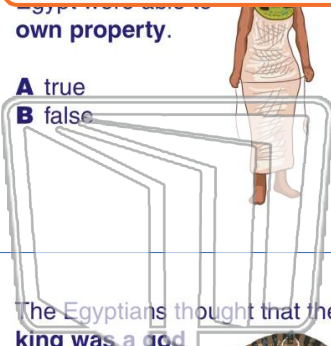
Please [Sign In](#) or [Sign Up](#) to download the printable version of this worksheet

5

7

Egyptians had their own property.

- A true
- B false



the Egyptians called their king.

- A pyramid
- B mummy
- C edict
- D pharaoh



NEW PATH LEARNING

9 The Egyptians thought that their king was a god in human form.

- A true
- B false



10 What system of writing was used by the Egyptians?

- A mastabas
- B hieroglyphics
- C vizier
- D scribes

