



# Ancient Egypt

SS  
F

Name \_\_\_\_\_ Class \_\_\_\_\_ Date \_\_\_\_\_

1 Early Egyptians settled around what **body of water**?

Circle the answer letter.

- a. Amazon River
- b. Red Sea
- c. Nile River



6 The history of Egypt is usually divided into three parts, The Old Kingdom, The Middle Kingdom and the New Kingdom. During the **New Kingdom**, priests chose a **new king**, a young boy named \_\_\_\_\_.

- Narmer
- Amon-Re
- Nefertiti
- Tutankhamen



2 In order to **predict** when the Nile would **flood**, Egyptians studied the weather. A \_\_\_\_\_ was used to **keep track of the weather**.



7 During the time known as the New Kingdom, **Amenhotep IV and his wife**, \_\_\_\_\_, created a religious system with only one god.



## PREVIEW

Please [Sign In](#) or [Sign Up](#) to download the printable version of this worksheet


3 The  
g  
n

and the



4 T  
a  
Cairo's first king.

- a. pyramid
- b. pharaoh
- c. vizier



Pyramid built:

- a. Middle
- b. Second
- c. Old




5 What **system of writing** was used by the Egyptians?

- a. mastabas
- b. hieroglyphics
- c. scribes



10 What **desert** borders Egypt to the **west**?

- a. Sahara
- b. Gobi
- c. Saudi





# Ancient Egypt - Answer Key

SS  
F

Name \_\_\_\_\_ Class \_\_\_\_\_ Date \_\_\_\_\_

1 Early Egyptians settled around what **body of water**?

Circle the answer letter.

- a. Amazon River
- b. Red Sea
- c. Nile River



6 The history of Egypt is usually divided into three parts, The Old Kingdom, The Middle Kingdom and the New Kingdom. During the **New Kingdom**, priests chose a **new king**, a young boy named \_\_\_\_\_.

- Narmer
- Amon-Re
- Nefertiti
- Tutankhamen



2 In order to **predict** when the Nile would **flood**, Egyptians studied the weather. A \_\_\_\_\_ was used to **keep track of the weather**.



7 During the time known as the New Kingdom, **Amenhotep IV and his wife**, \_\_\_\_\_, created a religious system with only one god.




## PREVIEW

Please [Sign In](#) or [Sign Up](#) to download the printable version of this worksheet

3 The \_\_\_\_\_

and the



4 The \_\_\_\_\_

- a. pyramid
- b. pharaoh
- c. vizier



Pyramid built:

- a. Middle
- b. Second
- c. Old



5 What **system of writing** was used by the Egyptians?

- a. mastabas
- b. hieroglyphics
- c. scribes



10 What **desert** borders Egypt to the **west**?

- a. Sahara
- b. Gobi
- c. Saudi

