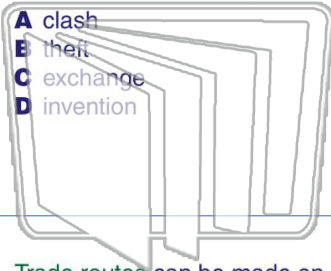




Name _____ Class _____ Date _____

1 Trade is the _____ of information and goods.

- A clash
- B theft
- C exchange
- D invention



2 What usually determines the area that makes up a trade route?

- A camels
- B geography
- C religion
- D laws



NEW PATH LEARNING

3 Trade routes can be made on land or in water.



4 A group of traders is also referred to as a(n) _____.

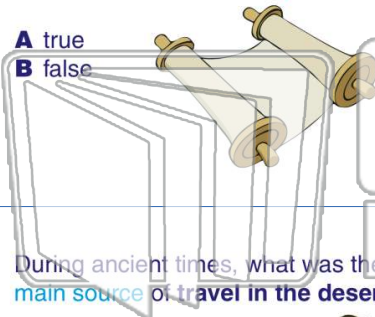


PREVIEW

Please [Sign In](#) or [Sign Up](#) to download the printable version of this worksheet

7 _____ of medicine and astronomy.

- A true
- B false



_____ of the trade routes for others to use.


- A archaeologists
- B caravansaries
- C cartographers
- D priests



NEW PATH LEARNING

9 During ancient times, what was the main source of travel in the desert?

- A wagon
- B donkey
- C horse
- D camel



10 How were most trade routes traveled between Mesopotamia and India?

- A by ships
- B on camels
- C by foot
- D on hot air balloons





Name _____ Class _____ Date _____

1 Trade is the _____ of information and goods.

- A clash
- B theft
- C exchange
- D invention



2 What usually determines the area that makes up a trade route?

- A camels
- B geography
- C religion
- D laws



3 Trade routes can be made on land or in water.



4 A group of traders is also referred to as a(n) _____.

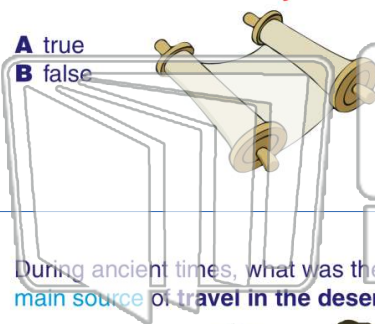


PREVIEW

Please [Sign In](#) or [Sign Up](#) to download the printable version of this worksheet

7 _____ medicine and astronomy.

- A true
- B false




_____ of the trade routes for others to use.

- A archaeologists
- B caravansaries
- C cartographers
- D priests



9 During ancient times, what was the main source of travel in the desert?

- A wagon
- B donkey
- C horse
- D camel



10 How were most trade routes traveled between Mesopotamia and India?

- A by ships
- B on camels
- C by foot
- D on hot air balloons

