



Name \_\_\_\_\_ Class \_\_\_\_\_ Date \_\_\_\_\_

1 The leading reservoir of **fresh water** is found in \_\_\_\_\_.

- A fjords
- B Iceland
- C glaciers
- D the Atlantic Ocean



2 A piece of land that protrudes **into the sea** or other body of water is called a \_\_\_\_\_.

- A glacier
- B cape
- C reef
- D bay

3 The earth's rotation and the moon's gravitational pull have **no effect** on ocean currents.

4 A **fall line** is often indicated by a \_\_\_\_\_.



**PREVIEW**

Please [Sign In](#) or [Sign Up](#) to download the printable version of this worksheet

7 flooded.

- A fjords
- B steppes
- C capes
- D moraines



the stream.

- A lowest
- B highest
- C fastest
- D slowest



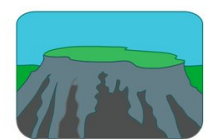
9 An **estuary** has one or more streams or rivers flowing into it and is connected to the sea.

- A true
- B false



10 One characteristic of a **plateau** is that it must have \_\_\_\_\_.

- A an enclosed basin
- B a coastline
- C a mountain base
- D level surface area

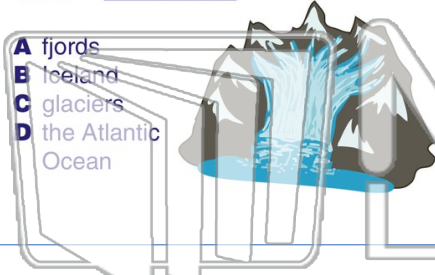




Name \_\_\_\_\_ Class \_\_\_\_\_ Date \_\_\_\_\_

1 The leading reservoir of **fresh water** is found in \_\_\_\_\_.

- A fjords
- B Iceland
- C glaciers
- D the Atlantic Ocean



2 A piece of land that protrudes **into the sea** or other body of water is called a \_\_\_\_\_.

- A glacier
- B cape
- C reef
- D bay



3 The earth's rotation and the moon's gravitational pull have **no effect** on ocean currents.

4 A **fall line** is often indicated by a \_\_\_\_\_.

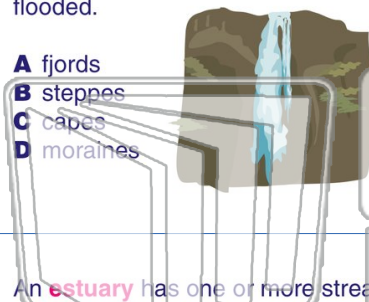


**PREVIEW**

Please [Sign In](#) or [Sign Up](#) to download the printable version of this worksheet


7 flooded.

- A fjords
- B steppes
- C capes
- D moraines



the stream.

- A lowest
- B highest
- C fastest
- D slowest



9 An **estuary** has one or more streams or rivers flowing into it and is connected to the sea.

- A true
- B false



10 One characteristic of a **plateau** is that it must have \_\_\_\_\_.

- A an enclosed basin
- B a coastline
- C a mountain base
- D level surface area

