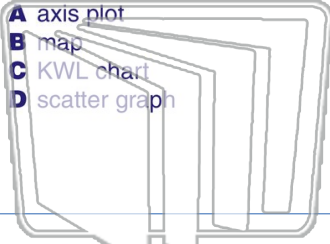




Name \_\_\_\_\_ Class \_\_\_\_\_ Date \_\_\_\_\_

1 A \_\_\_\_\_ shows the **relationship between two variables**.

- A axis plot
- B map
- C KWL chart
- D scatter graph



2 The earliest globe on record is still around today. It is estimated to have been made in \_\_\_\_\_.

- A 3000 B.C.
- B 150 B.C.
- C A.D. 1000
- D A.D. 1215



# NEW PATH LEARNING

3 A **globe's scale** is most likely \_\_\_\_\_.



4 **Raised relief** on a globe or map is known as \_\_\_\_\_.



## PREVIEW

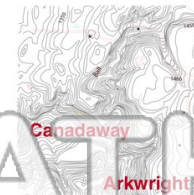
Please [Sign In](#) or [Sign Up](#) to download the printable version of this worksheet

7

- A ocean currents
- B elevation
- C geographic boundaries
- D the White House



- A arrows
- B models
- C longitudes
- D isolines



# NEW PATH LEARNING

9 Patterns of **migration** can be mapped by looking at religious, cultural, political and economical history.

True or false?

- A true
- B false



10 Satellite images are always produced in **black and white**.

True or false?

- A true
- B false

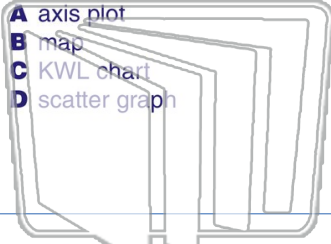




Name \_\_\_\_\_ Class \_\_\_\_\_ Date \_\_\_\_\_

1 A \_\_\_\_\_ shows the **relationship between two variables**.

- A axis plot
- B map
- C KWL chart
- D scatter graph



2 The earliest globe on record is still around today. It is estimated to have been made in \_\_\_\_\_.

- A 3000 B.C.
- B 150 B.C.
- C A.D. 1000
- D A.D. 1215



3 A **globe's scale** is most likely \_\_\_\_\_.



4 **Raised relief** on a globe or map is known as \_\_\_\_\_.



## PREVIEW

Please [Sign In](#) or [Sign Up](#) to download the printable version of this worksheet

7

- A ocean currents
- B elevation
- C geographic boundaries
- D the White House



- A arrows
- B models
- C longitudes
- D isolines



9 Patterns of **migration** can be mapped by looking at religious, cultural, political and economical history.

True or false?

- A true
- B false



10 Satellite images are always produced in **black and white**.

True or false?

- A true
- B false

