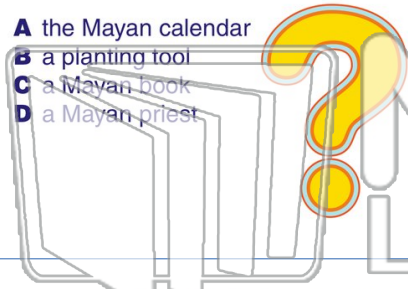




Name _____ Class _____ Date _____

1 What is a **codice**?

- A the Mayan calendar
- B a planting tool
- C a Mayan book
- D a Mayan priest



2 How did the Maya **keep track** of **time**?

- A a system of hieroglyphic symbols
- B a system of dots and bars
- C sundials
- D watches



3 One **agricultural** technique the Maya used is _____.

4 In the **Mayan writing** system, individual **symbols** were used to represent words and sounds.

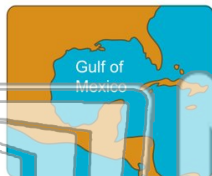


PREVIEW

Please [Sign In](#) or [Sign Up](#) to download the printable version of this worksheet

7

- A calendar
- B religion
- C language
- D government



- A 1
- B 2
- C 20
- D 100

9 The city of **Tikal** was **abandoned** around the turn of the _____ century.

- A 1st
- B 11th
- C 13th
- D 9th

10 Which if the following **codices** demonstrated the Maya's knowledge in **astronomy**?

- A Maize
- B Dresden
- C Osuna
- D Paris





Name _____ Class _____ Date _____

1 What is a **codice**?

- A the Mayan calendar
- B a planting tool
- C a Mayan book
- D a Mayan priest



2 How did the Maya **keep track** of **time**?

- A a system of hieroglyphic symbols
- B a system of dots and bars
- C sundials
- D watches



3 One **agricultural** **technique** the Maya used is _____.

4 In the **Mayan writing** system, individual **symbols** were used to represent words and sounds.



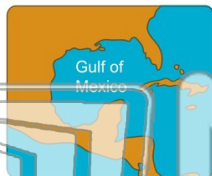


PREVIEW

Please [Sign In](#) or [Sign Up](#) to download the printable version of this worksheet

7

- A calendar
- B religion
- C language
- D government



- A 1
- B 2
- C 20
- D 100

9 The city of **Tikal** was **abandoned** around the turn of the _____ century.

- A 1st
- B 11th
- C 13th
- D 9th

10 Which if the following **codices** demonstrated the Maya's knowledge in **astronomy**?

- A Maize
- B Dresden
- C Osuna
- D Paris

