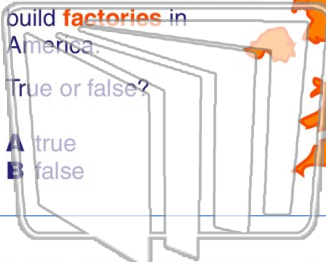




Name _____ Class _____ Date _____

1 The **American Industrial Revolution** started when **Great Britain** started to build **factories** in America.
True or false?
A true
B false



2 When did the American Industrial Revolution **begin**?
A 1700
B 1790
C 1830
D 1890



3 In the early United States, where was the **first factory** built?



4 Who is known as the **Father** of the **American Industrial Revolution**?

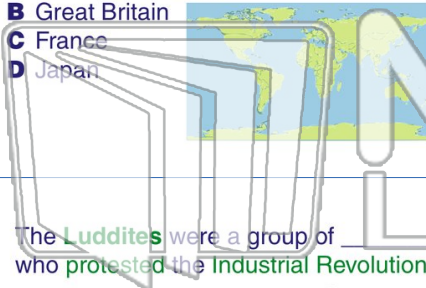
5

PREVIEW

Please [Sign In](#) or [Sign Up](#) to download the printable version of this worksheet

7

8 The **Industrial Revolution** began in _____.
A the United States
B Great Britain
C France
D Japan



9 The **Luddites** were a group of _____ who **protested** the **Industrial Revolution**.
A textile artisans
B plantation owners
C children
D factory owners



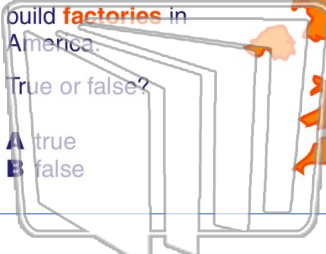
10 What did the **Factory Act of 1833** place a **limit** on?
A the number of children that could work in a factory
B the amount of money a child could earn
C the number of hours one could work in a day
D the time a child could spend in school





Name _____ Class _____ Date _____

1 The **American Industrial Revolution** started when **Great Britain** started to build **factories** in America.
True or false?
A true
B false



2 When did the American Industrial Revolution **begin**?
A 1700
B 1790
C 1830
D 1890



3 In the early United States, where was the **first factory** built?



4 Who is known as the **Father** of the **American Industrial Revolution**?

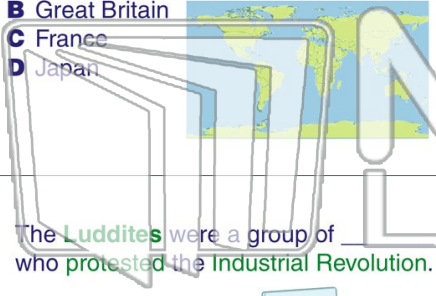
5

PREVIEW

Please [Sign In](#) or [Sign Up](#) to download the printable version of this worksheet

7

- A the United States
- B Great Britain
- C France
- D Japan



- A poor working conditions
- B population
- C child labor
- D illiteracy



9 The **Luddites** were a group of who **protested** the **Industrial Revolution**.
A textile artisans
B plantation owners
C children
D factory owners



10 What did the **Factory Act of 1833** place a **limit** on?
A the number of children that could work in a factory
B the amount of money a child could earn
C the number of hours one could work in a day
D the time a child could spend in school

