




Name _____ Class _____ Date _____

1 Ancient Rome was built on **flat land** that **lacked the protection of mountains** like so many other civilizations of the time.

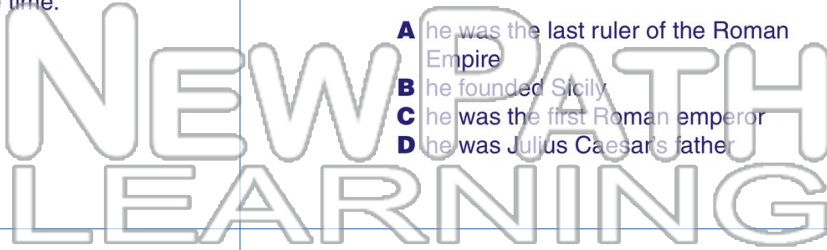
True or false?

- A true
- B false



2 What is the significance of **Octavius** in ancient Roman history?

- A he was the last ruler of the Roman Empire
- B he founded Sicily
- C he was the first Roman emperor
- D he was Julius Caesar's father



3 Under **Constantine's** rule, the **capital of the ancient Rome** was located in _____.

4 According to **myth**, who were **Romulus and Remus**?



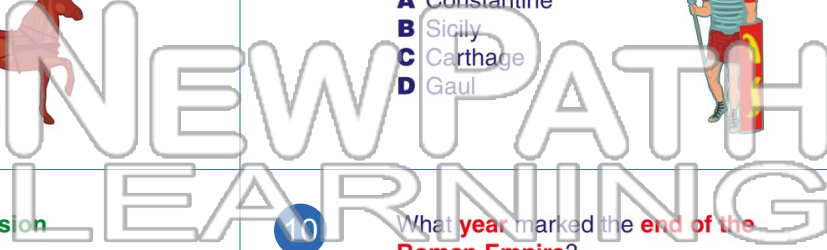
PREVIEW

Please [Sign In](#) or [Sign Up](#) to download the printable version of this worksheet

7 _____ during the **Galic Wars**.

- A the Colosseum
- B Circus Maximus
- C the Roman Mall
- D the Etruscan Hippodrome

- A Constantine
- B Sicily
- C Carthage
- D Gaul



9 When did **Caesar's Roman invasion of Britain** take place?

10 What **year** marked the **end of the Roman Empire**?

- A A.D. 43
- B 313 B.C.
- C 55 B.C.
- D A.D. 121

- A A.D. 399
- B A.D. 230
- C A.D. 476
- D A.D. 501






Name _____ Class _____ Date _____

1 Ancient Rome was built on **flat land** that **lacked the protection of mountains** like so many other civilizations of the time.

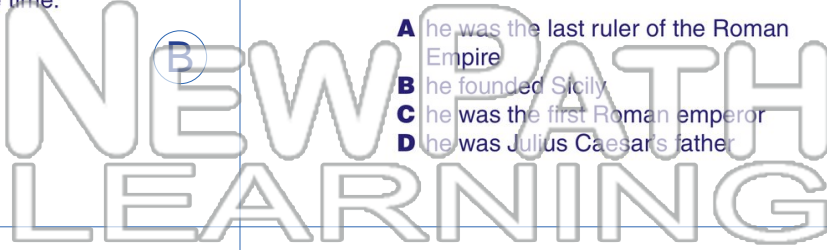
True or false?

- A true
- B false



2 What is the significance of **Octavius** in ancient Roman history?

- A he was the last ruler of the Roman Empire
- B he founded Sicily
- C he was the first Roman emperor
- D he was Julius Caesar's father



3 Under **Constantine's** rule, the **capital of the ancient Rome** was located in _____.

4 According to **myth**, who were **Romulus and Remus**?





PREVIEW

Please [Sign In](#) or [Sign Up](#) to download the printable version of this worksheet

5

7

- A the Colosseum
- B Circus Maximus
- C the Roman Mall
- D the Etruscan Hippodrome



during the **Gaulic Wars**.

- A Constantine
- B Sicily
- C Carthage
- D Gaul



9 When did **Caesar's Roman invasion of Britain** take place?

- A A.D. 43
- B 313 B.C.
- C 55 B.C.
- D A.D. 121



10 What **year** marked the **end of the Roman Empire**?

- A A.D. 399
- B A.D. 230
- C A.D. 476
- D A.D. 501

