

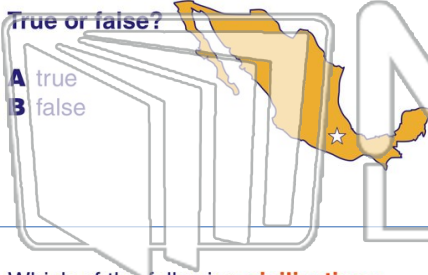


Name _____ Class _____ Date _____

1 In the **fourteenth and fifteenth century**, Mexico was considered to be an **Empire**.

True or false?

- A true
- B false



2 The **Political Constitution of the United Mexican States**, the current governing document of Mexico, was signed in which year?

- A 1917
- B 1824
- C 1983
- D 1899



3 Which of the following **civilizations** did **not** originate in the area we know as **Mexico**?

4 Which of the following countries **borders Mexico**?




PREVIEW

Please [Sign In](#) or [Sign Up](#) to download the printable version of this worksheet

7 States?

- A 4,500 miles
- B 1,300 miles
- C 5,000 miles
- D 3,100 miles



- A 10
- B 17
- C 31
- D 23



9 **Puebla** is one of the **31 Mexican states**.

True or false?

- A true
- B false



10 What is the name of the **peninsula** that separates the **Caribbean Sea** from the **Gulf of Mexico**?

- A Chiapas
- B Dominican
- C Yucatan
- D Panamanian



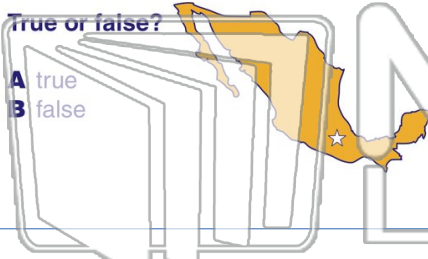


Name _____ Class _____ Date _____

1 In the **fourteenth and fifteenth century**, Mexico was considered to be an **Empire**.

True or false?

- A true
- B false



2 The **Political Constitution of the United Mexican States**, the current governing document of Mexico, was signed in which year?

- A 1917
- B 1824
- C 1983
- D 1899



3 Which of the following **civilizations** did **not** originate in the area we know as **Mexico**?

4 Which of the following countries **borders Mexico**?




PREVIEW

Please [Sign In](#) or [Sign Up](#) to download the printable version of this worksheet

7 States?

- A 4,500 miles
- B 1,300 miles
- C 5,000 miles
- D 3,100 miles



- A 10
- B 17
- C 31
- D 23



9 **Puebla** is one of the **31 Mexican states**.

True or false?

- A true
- B false



10 What is the name of the **peninsula** that separates the **Caribbean Sea** from the **Gulf of Mexico**?

- A Chiapas
- B Dominican
- C Yucatan
- D Panamanian

